



- *Suma y une con cada una de sus resultados.*

$8 + 3$

$12$

$9 + 4$

$16$

$6 + 6$

$11$

$8 + 8$

$13$

$9 + 9$

$15$

$8 + 7$

$14$

$8 + 9$

$18$

$6 + 8$

$17$

- *Suma y colorea según como se te indica.*

$$14 + 4 =$$

marrón

$$12 + 6 =$$

amarillo

$$10 + 2 =$$

morado

$$22 + 6 =$$

rojo

$$18 + 4 =$$

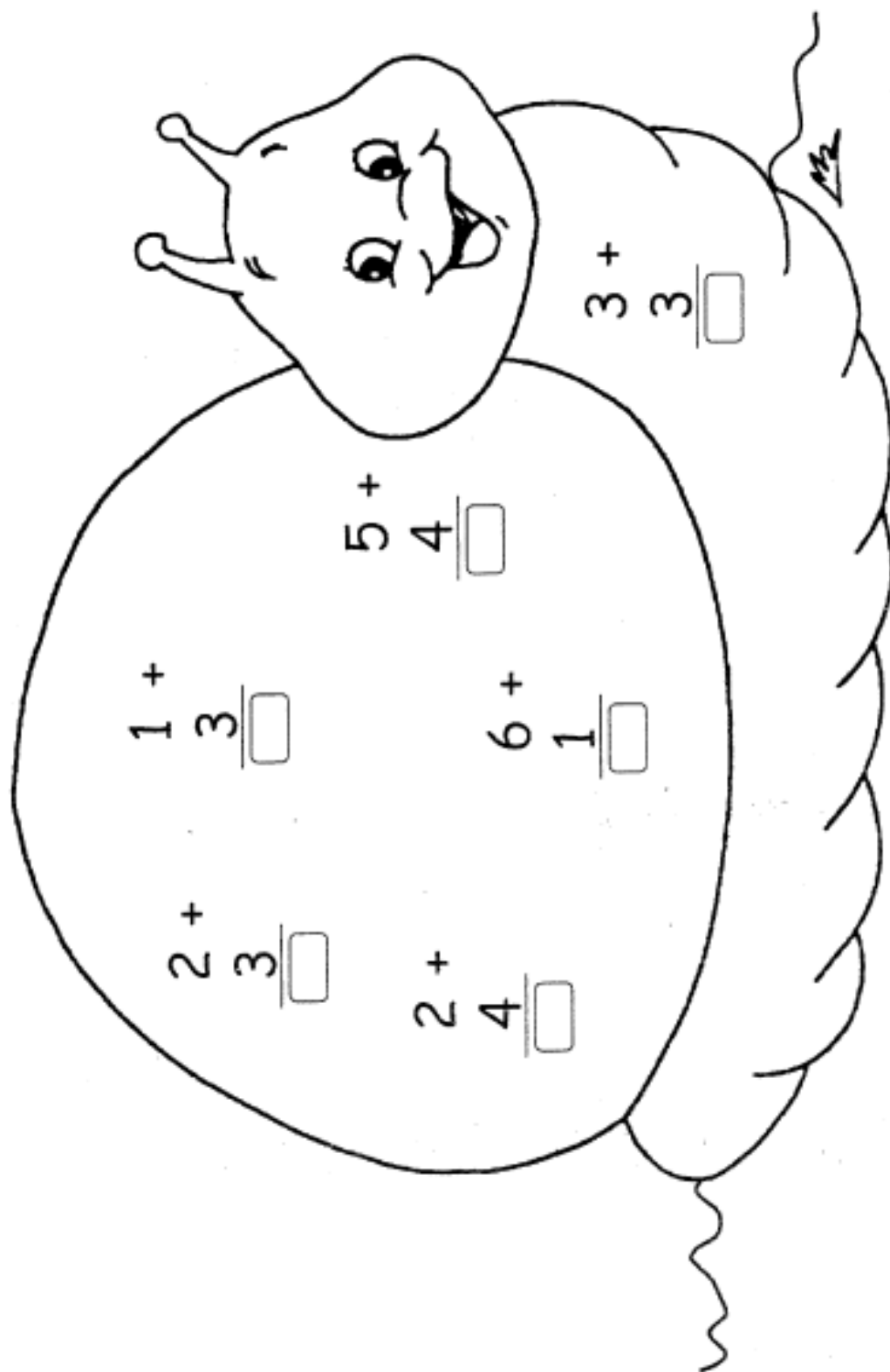
verde

$$13 + 6 =$$

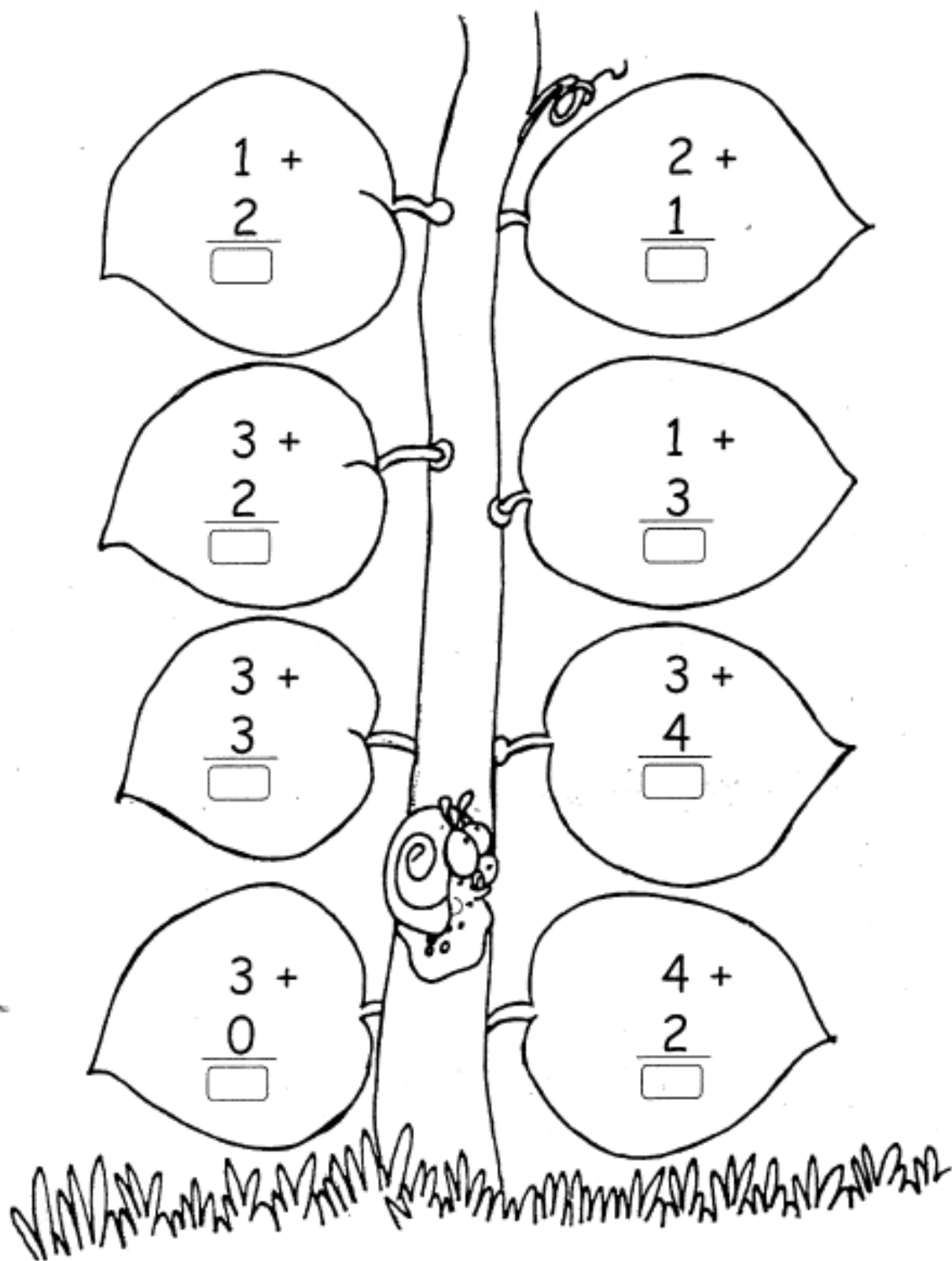
negro



- Resuelve las sumas y colorea.



- *Continuamos con las sumas, coloreamos la planta.*



- *Resuelve y escribe los resultados.*

$$\begin{array}{r} 4 + \\ 4 \\ \hline \square \end{array}$$

$$\begin{array}{r} 9 + \\ 5 \\ \hline \square \end{array}$$

$$\begin{array}{r} 8 + \\ 4 \\ \hline \square \end{array}$$

$$\begin{array}{r} 6 + \\ 6 \\ \hline \square \end{array}$$

$$\begin{array}{r} 7 + \\ 5 \\ \hline \square \end{array}$$

$$\begin{array}{r} 8 + \\ 3 \\ \hline \square \end{array}$$

$$\begin{array}{r} 9 + \\ 2 \\ \hline \square \end{array}$$

$$\begin{array}{r} 8 + \\ 5 \\ \hline \square \end{array}$$

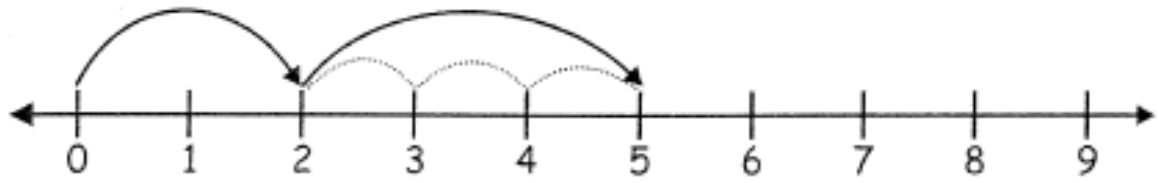
$$\begin{array}{r} 7 + \\ 6 \\ \hline \square \end{array}$$

$$\begin{array}{r} 4 + \\ 5 \\ \hline \square \end{array}$$

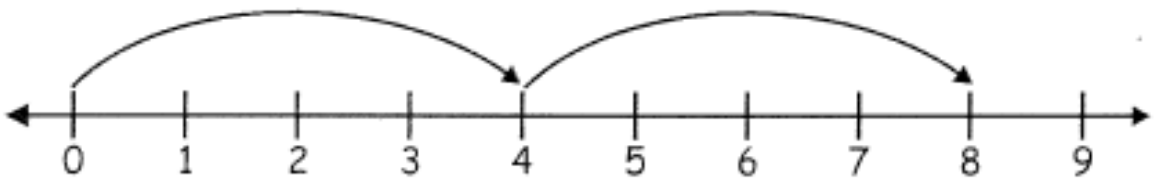
$$\begin{array}{r} 5 + \\ 3 \\ \hline \square \end{array}$$

$$\begin{array}{r} 6 + \\ 5 \\ \hline \square \end{array}$$

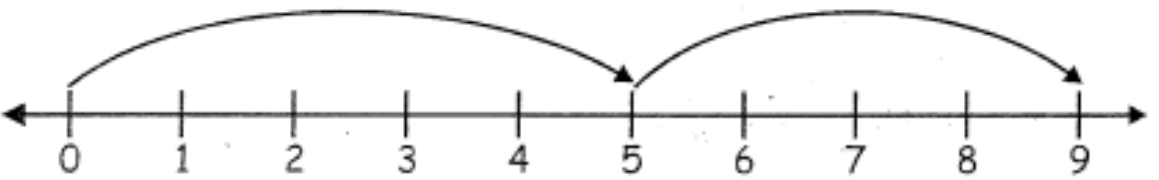
- *Completa el sumando y resuelve la suma en la recta numérica.*



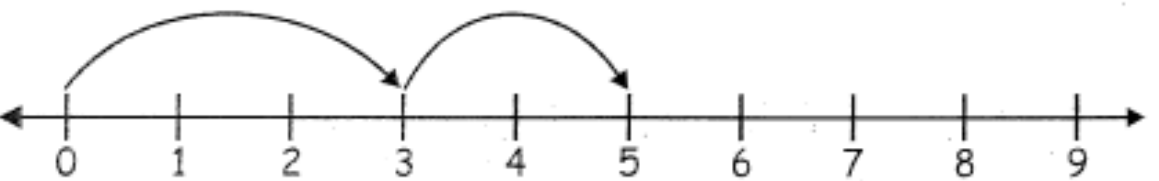
$$2 + 3 = 5$$



$$+ =$$



$$+ =$$



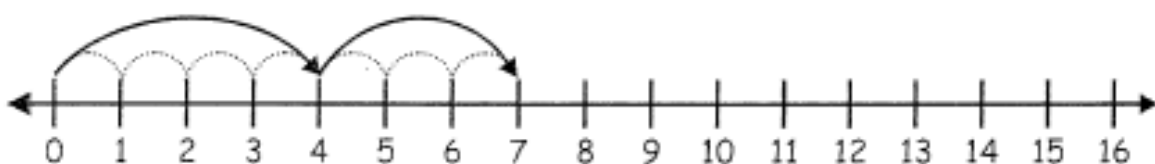
$$+ =$$

- Representa en la recta numérica y halla la suma.

$$\boxed{3} + \boxed{3} = \boxed{\phantom{00}}$$



$$\boxed{4} + \boxed{\phantom{00}} = \boxed{7}$$



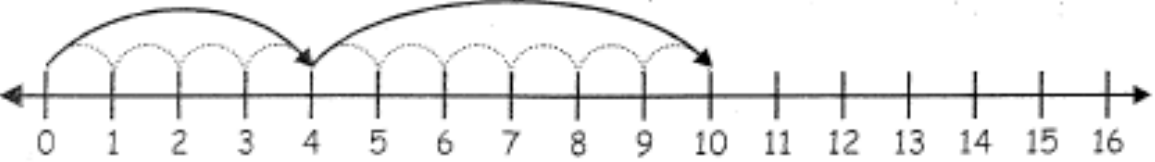
$$\boxed{2} + \boxed{\phantom{00}} = \boxed{\phantom{00}}$$



$$\boxed{\phantom{00}} + \boxed{\phantom{00}} = \boxed{\phantom{00}}$$

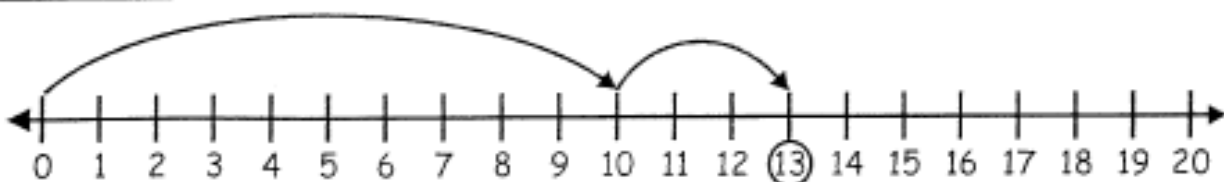
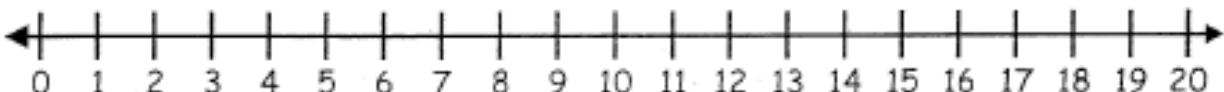
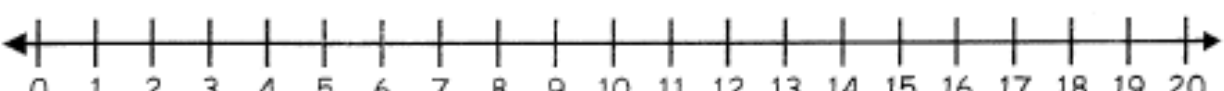
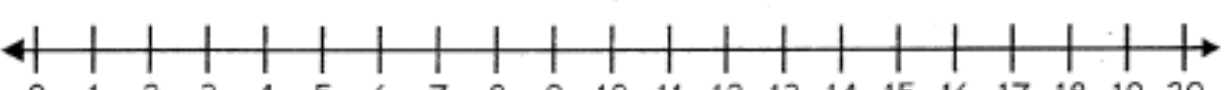
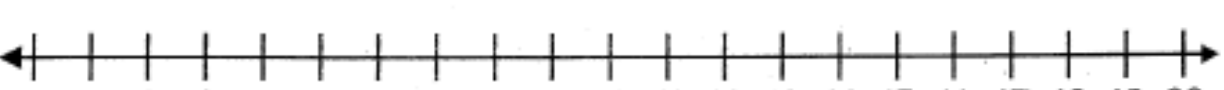


$$\boxed{\phantom{00}} + \boxed{\phantom{00}} = \boxed{\phantom{00}}$$





- Resuelve las sumas en la recta numérica.

 <p><math>10 + 3 =</math></p>
 <p><math>10 + 5 =</math></p>
 <p><math>10 + 1 =</math></p>
 <p><math>10 + 2 =</math></p>
 <p><math>10 + 4 =</math></p>