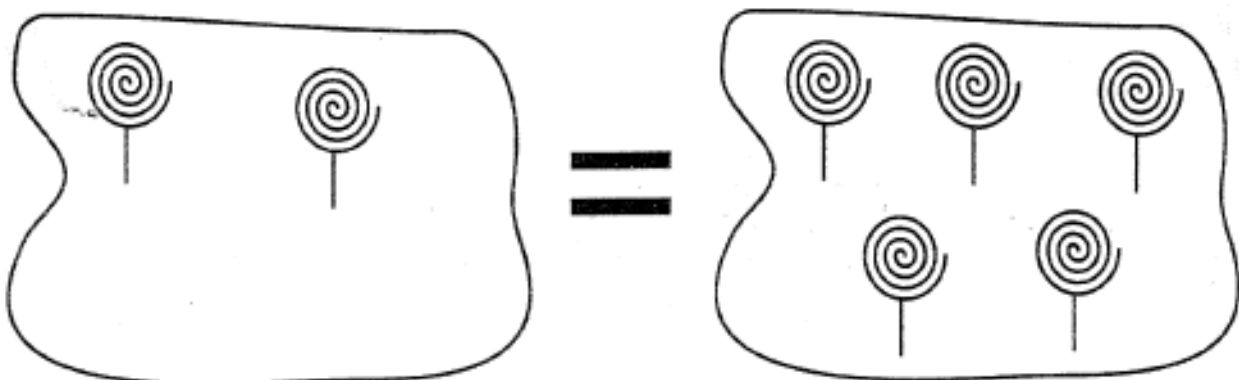
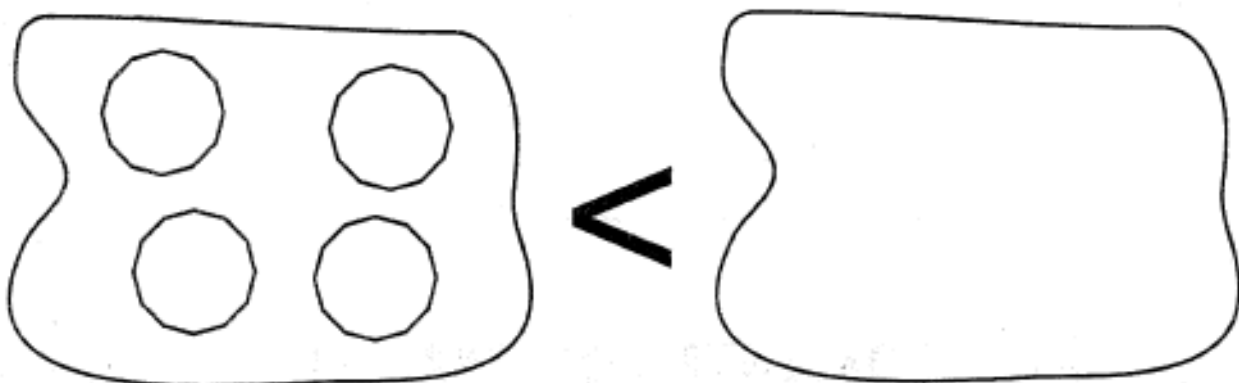
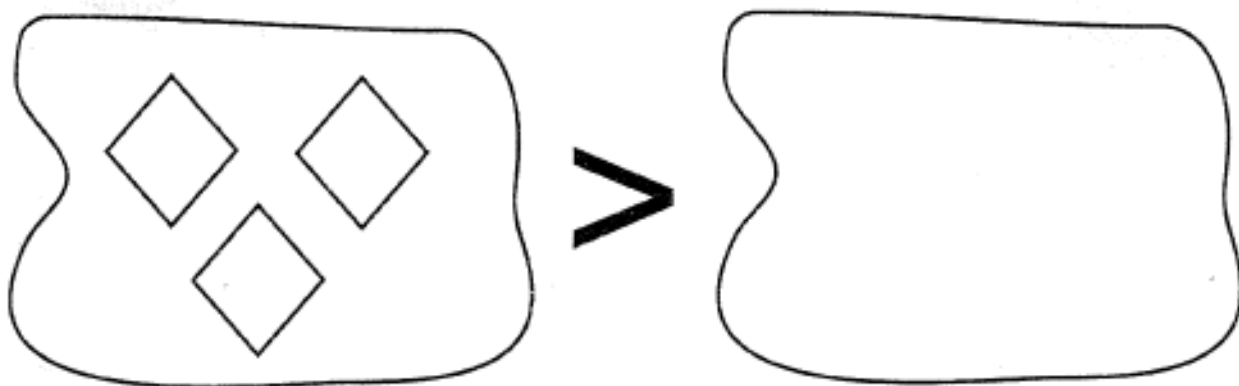
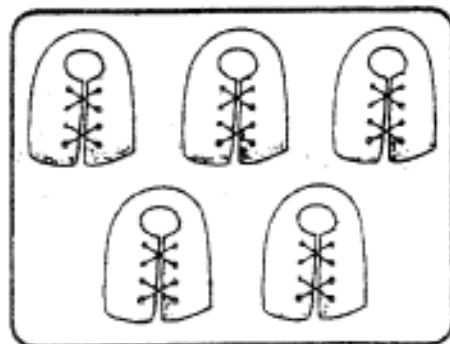
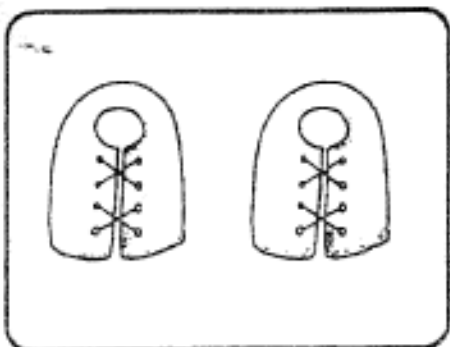
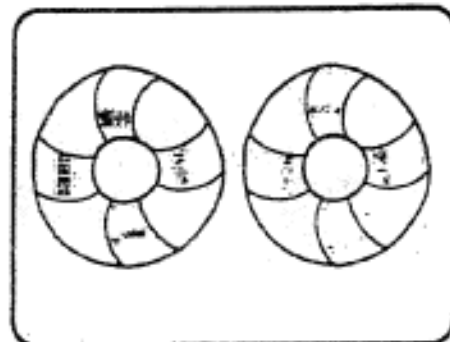
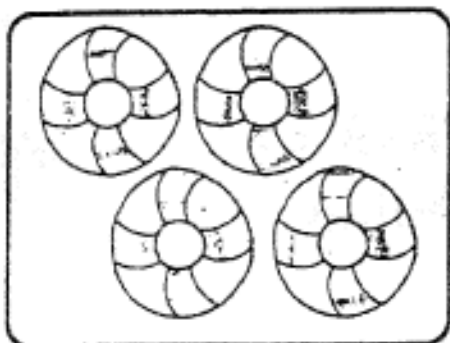
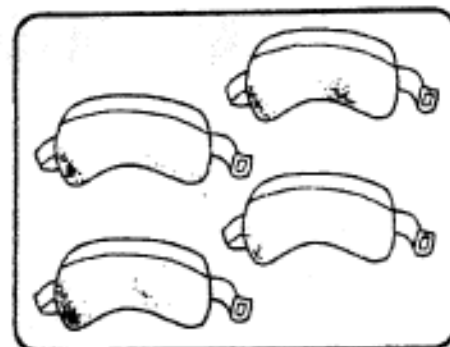
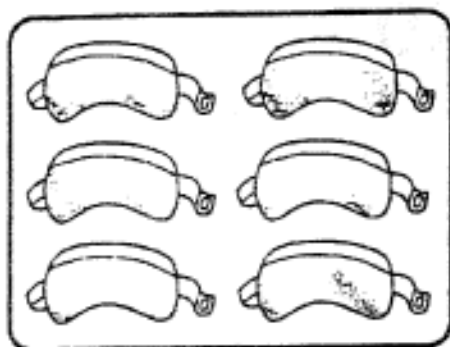


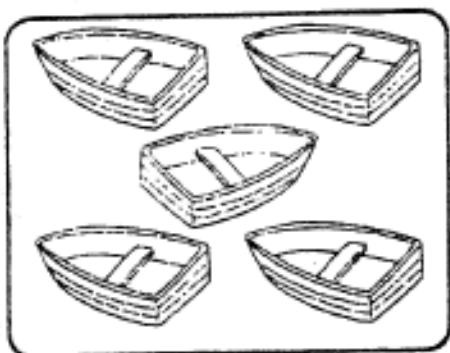


# SIGNOS DE MAYOR - MENOR QUE E IGUAL




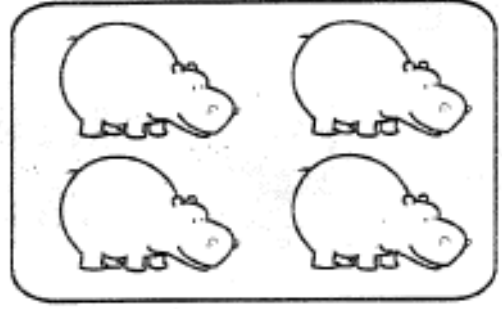


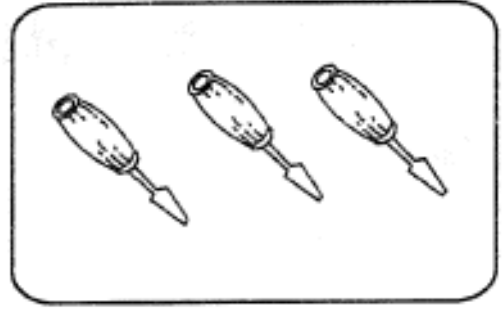

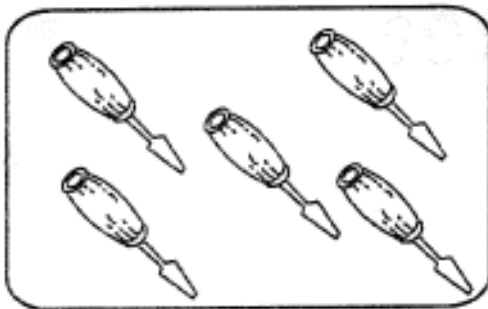



Completa los elementos que faltan con el signo que corresponde.



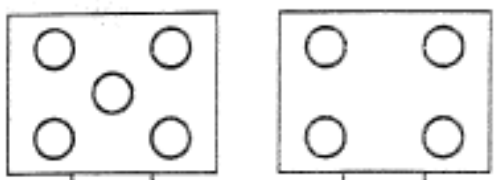

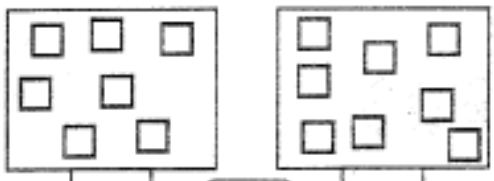

- Coloca el signo de mayor y/o menor que, según corresponda.




- *Compara los conjuntos, y escribe el signo mayor que, menor que o igual en los recuadros.*
- *Colorea las figuras.*



























- *Escribe el signo que le corresponde a cada recuadro.*

 <input type="checkbox"/> <input type="checkbox"/> <input type="checkbox"/>	 <input type="checkbox"/> <input type="checkbox"/> <input type="checkbox"/>
 <input type="checkbox"/> <input type="checkbox"/> <input type="checkbox"/>	 <input type="checkbox"/> <input type="checkbox"/> <input type="checkbox"/>



- Coloca el signo de mayor y/o menor que, según corresponda.

	<input type="checkbox"/>				<input type="checkbox"/>	
	<input type="checkbox"/>				<input type="checkbox"/>	
	<input type="checkbox"/>				<input type="checkbox"/>	
	<input type="checkbox"/>				<input type="checkbox"/>	
	<input type="checkbox"/>				<input type="checkbox"/>	
	<input type="checkbox"/>				<input type="checkbox"/>	

- Coloca el signo de mayor y/o menor que, según corresponda.

$13 \square 17$

$18 \square 13$

$19 \square 10$

$15 \square 5$

$14 \square 13$

$11 \square 0$

$14 \square 12$

$16 \square 16$

$19 \square 16$

$15 \square 17$


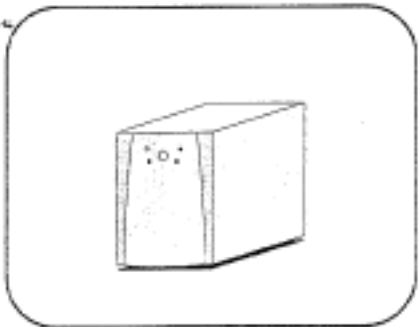

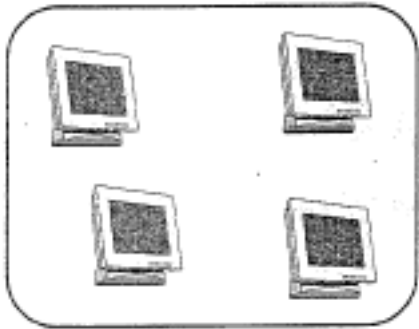
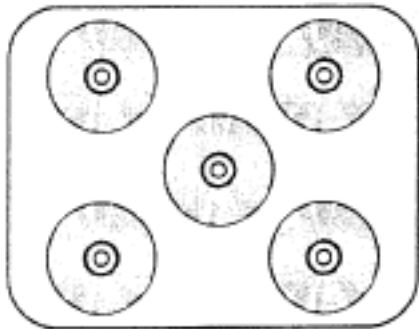


$19 \square 19$

$20 \square 19$

$21 \square 10$

$23 \square 23$

- *Dibuja elementos en los conjuntos de la derecha, según me indica el signo mayor que, menor que o igual.*



- Coloca el signo de mayor y/o menor que, según corresponda.

$20 \text{ \_\_\_\_ } 25$

$19 \text{ \_\_\_\_ } 15$

$25 \text{ \_\_\_\_ } 23 \text{ \_\_\_\_ } 20$

$22 \text{ \_\_\_\_ } 25 \text{ \_\_\_\_ } 26$

$18 \text{ \_\_\_\_ } 22 \text{ \_\_\_\_ } 21$

$24 \text{ \_\_\_\_ } 24 \text{ \_\_\_\_ } 24$

$26 \text{ \_\_\_\_ } 18$

$23 \text{ \_\_\_\_ } 24$



- *Escribe los números que corresponde a cada ejercicio.*

$\square < 20$

$\square > 10$

$\square > 15$

$\square < 23$

$\square > 27$

$\square < 30$

$\square < 17$

$\square > 26$

$\square > 24$

$\square < 29$

$\square > 11$

$\square < 16$

- Marca la respuesta correcta.

$\textcircled{?} > 20$ a) 4 b) 9 c) 28 d) 19	$\textcircled{?} > 28$ a) 11 b) 20 c) 24 d) 36	$\textcircled{?} > 30$ a) 45 b) 29 c) 27 d) 26
$\textcircled{?} > 50$ a) 37 b) 29 c) 51 d) 8	$\textcircled{?} > 58$ a) 60 b) 52 c) 47 d) 39	$\textcircled{?} > 60$ a) 59 b) 50 c) 47 d) 61
$\textcircled{?} > 40$ a) 40 b) 20 c) 60 d) 10	$\textcircled{?} > 35$ a) 35 b) 53 c) 27 d) 17	$\textcircled{?} > 29$ a) 92 b) 10 c) 15 d) 22
$\textcircled{?} > 20$ a) 26 b) 32 c) 49 d) 16	$\textcircled{?} > 36$ a) 36 b) 18 c) 42 d) 21	$\textcircled{?} > 64$ a) 46 b) 64 c) 39 d) 70

- *Completa la serie de números*

