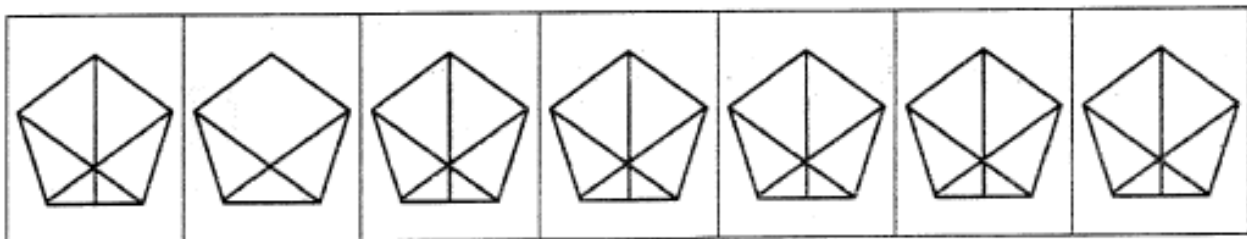
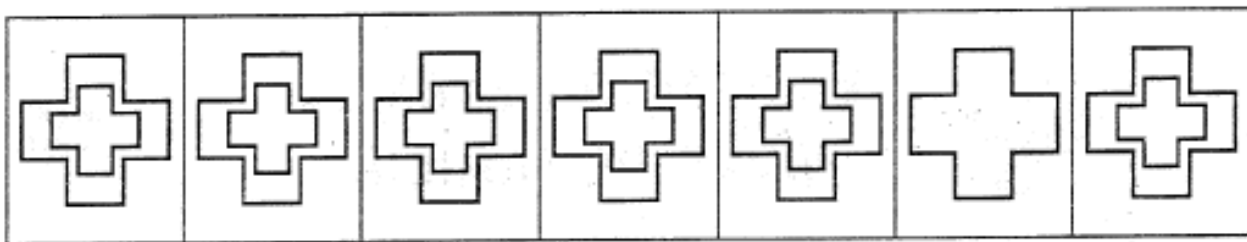
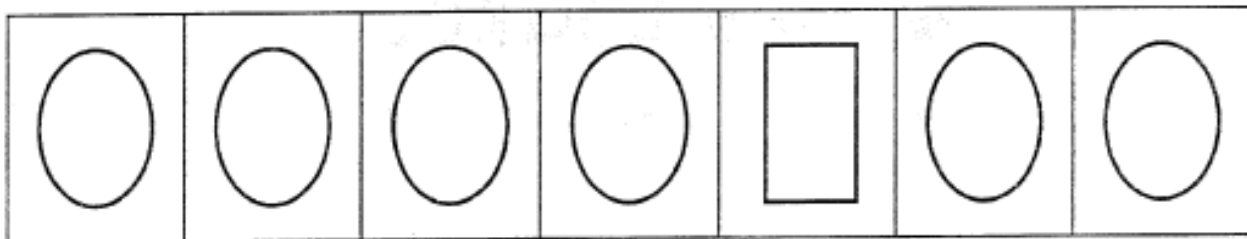
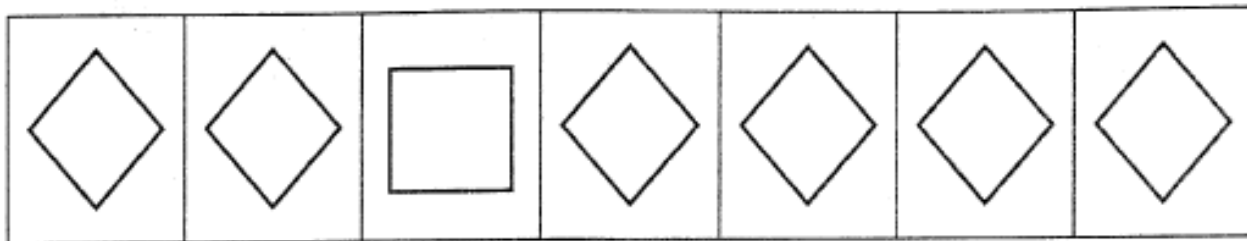
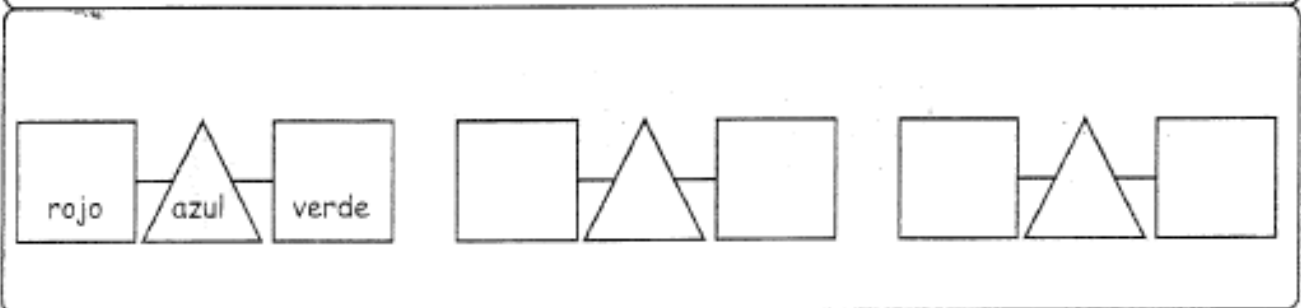
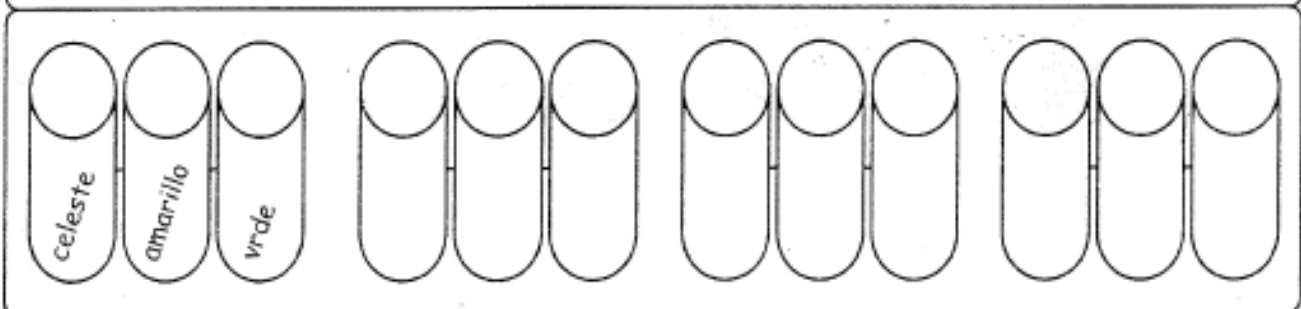
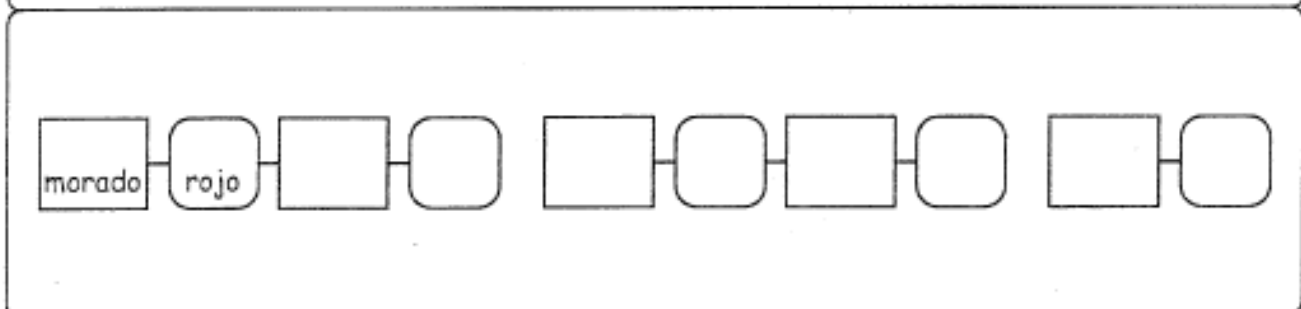
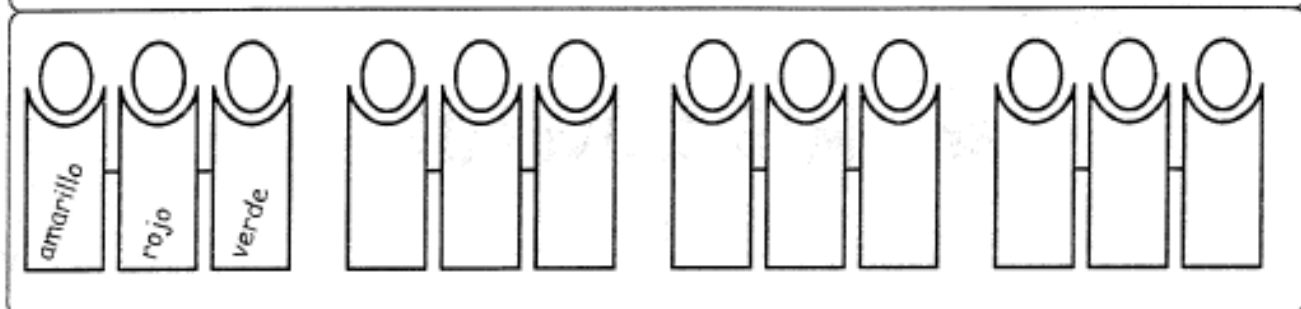
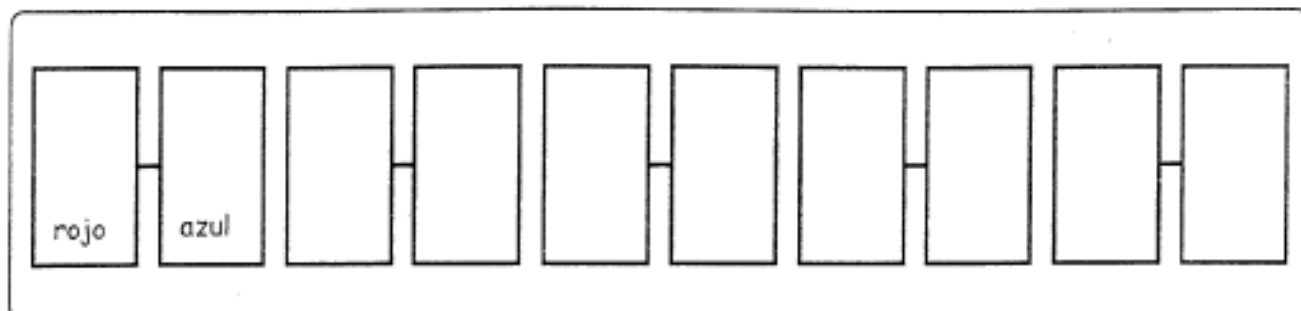


FIGURAS DIFERENTES

- *Identifica y colorea, en cada fila las figuras diferentes.*














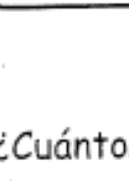
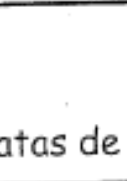
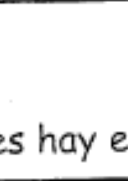


- *Completa las series con el color correspondiente.*







- En cada columna, marca con una cruz la alternativa correcta.

• ¿Cuántos conejitos faltan para completar dos decenas?

					5
					6
					7
					8

• ¿Cuántos patas de aves hay en total??

		4
		6
		8
		10

- En cada columna, marca con una cruz la alternativa correcta.

• ¿Qué número falta en el tablero posicional en blanco?

<table border="1"><tr><td>D</td><td>U</td></tr><tr><td>1</td><td>8</td></tr></table>	D	U	1	8	<table border="1"><tr><td>D</td><td>U</td></tr><tr><td>1</td><td>2</td></tr></table>	D	U	1	2	<table border="1"><tr><td>D</td><td>U</td></tr><tr><td>2</td><td>0</td></tr></table>	D	U	2	0	<table border="1"><tr><td>11</td></tr></table>	11
D	U															
1	8															
D	U															
1	2															
D	U															
2	0															
11																
<table border="1"><tr><td>D</td><td>U</td></tr><tr><td></td><td></td></tr></table>	D	U			<table border="1"><tr><td>D</td><td>U</td></tr><tr><td>1</td><td>1</td></tr></table>	D	U	1	1	<table border="1"><tr><td>D</td><td>U</td></tr><tr><td>2</td><td>1</td></tr></table>	D	U	2	1	<table border="1"><tr><td>12</td></tr></table>	12
D	U															
D	U															
1	1															
D	U															
2	1															
12																
			<table border="1"><tr><td>20</td></tr></table>	20												
20																
			<table border="1"><tr><td>21</td></tr></table>	21												
21																

• ¿Qué decena falta en el tablero posicional en blanco?

<table border="1"><tr><td>D</td><td>U</td></tr><tr><td>1</td><td>7</td></tr></table>	D	U	1	7	<table border="1"><tr><td>D</td><td>U</td></tr><tr><td>1</td><td>8</td></tr></table>	D	U	1	8	<table border="1"><tr><td>D</td><td>U</td></tr><tr><td>1</td><td>9</td></tr></table>	D	U	1	9	<table border="1"><tr><td>1</td></tr></table>	1
D	U															
1	7															
D	U															
1	8															
D	U															
1	9															
1																
<table border="1"><tr><td>D</td><td>U</td></tr><tr><td></td><td></td></tr></table>	D	U			<table border="1"><tr><td>D</td><td>U</td></tr><tr><td>2</td><td>1</td></tr></table>	D	U	2	1	<table border="1"><tr><td>D</td><td>U</td></tr><tr><td></td><td>2</td></tr></table>	D	U		2	<table border="1"><tr><td>2</td></tr></table>	2
D	U															
D	U															
2	1															
D	U															
	2															
2																
			<table border="1"><tr><td>3</td></tr></table>	3												
3																
			<table border="1"><tr><td>4</td></tr></table>	4												
4																