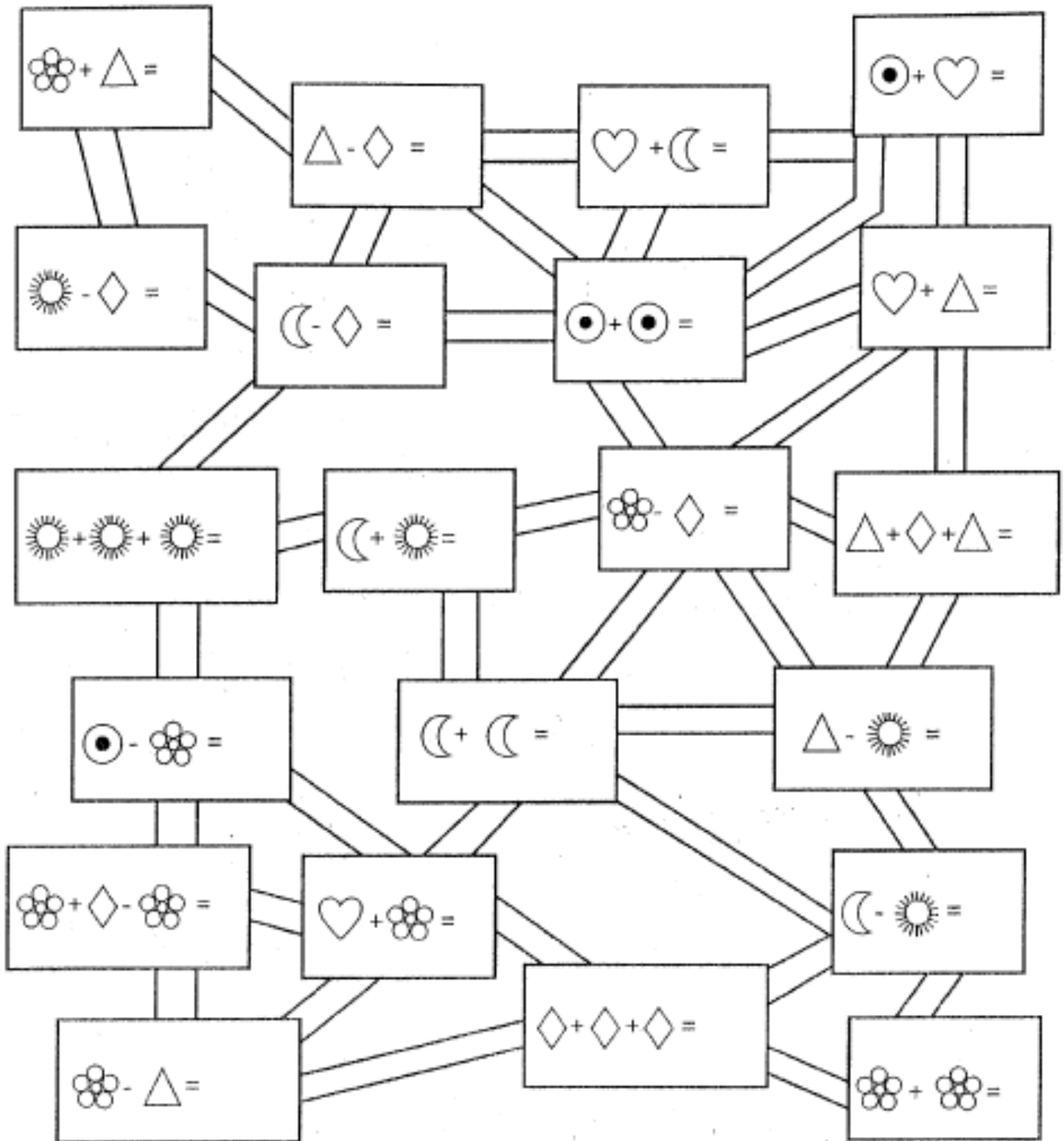









VALOR NUMERICO

- Cada figura tiene un valor numérico para que realices las operaciones de sumas o restas.



 = 9
  = 5
  = 7
  = 10
  = 4
  = 20
  = 8

- Cada figura tiene un valor numérico para que realices las operaciones de sumas o restas.

$$\square + \bigcirc =$$

$$\triangle + \square =$$

$$\diamond + \bigcirc =$$

$$\square + \bigcirc =$$

$$\bigcirc + \bigcirc =$$

$$\bigcirc - \square =$$

$$\bigcirc - \bigcirc =$$

$$\triangle - \square =$$





$$\bigcirc + \bigcirc =$$

$$\square + \triangle =$$













































$$\square + \triangle =$$

$$\square - \square =$$

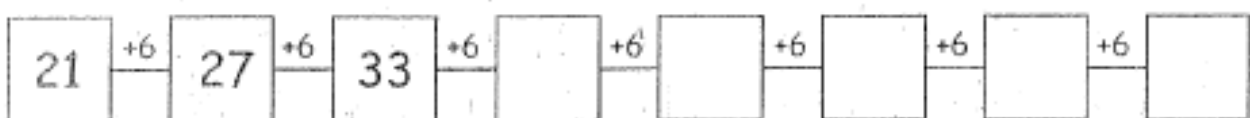
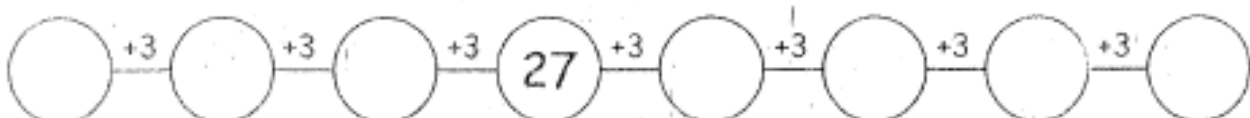
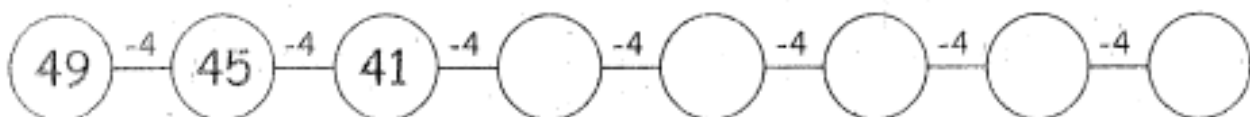
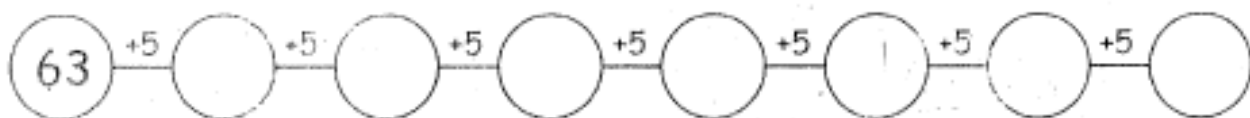
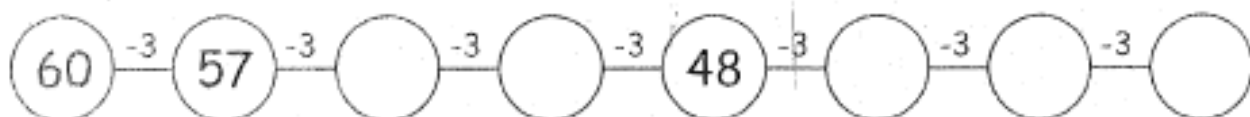
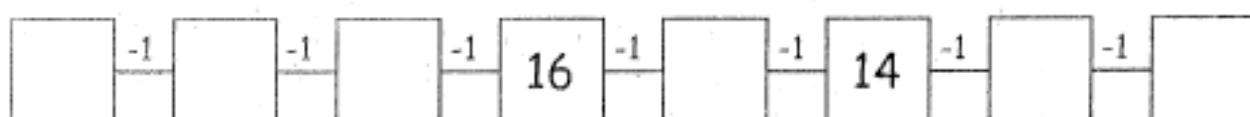
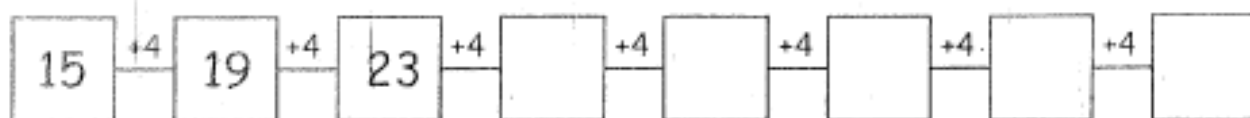
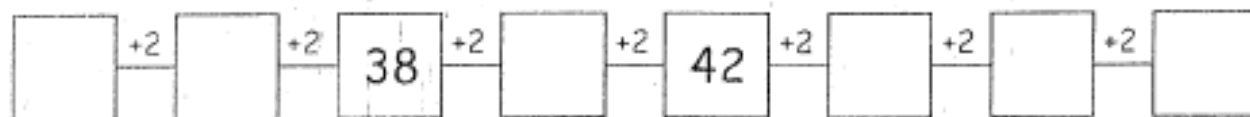
$\bigcirc = 5$ $\square = 2$ $\triangle = 4$ $\square = 1$ $\diamond = 3$ $\bigcirc = 6$

- Cada una de estas imágenes tienen un valor numérico,  = 1,  = 2,  = 8 y  = 9.

- Resuelve las operaciones y marca la respuesta correcta.

 +  <u>1</u> + <u>8</u> = <u>9</u>   	 -  <u> </u> - <u> </u> = <u> </u>   
 -  <u> </u> - <u> </u> = <u> </u>   	 +  <u> </u> + <u> </u> = <u> </u>   
 +  +  <u> </u> + <u> </u> + <u> </u> = <u> </u>   	 +  +  <u> </u> + <u> </u> + <u> </u> = <u> </u>   
 +  +  <u> </u> + <u> </u> + <u> </u> = <u> </u>   	 +  +  <u> </u> + <u> </u> + <u> </u> = <u> </u>   

- *Continuamos resolviendo las siguientes sucesiones.*



- Haz las operaciones y descubre el mensaje secreto.

(A)

$$\begin{array}{r} 25+ \\ 13 \\ \hline \end{array}$$

(C)

$$\begin{array}{r} 76- \\ 22 \\ \hline \end{array}$$

(D)

$$\begin{array}{r} 32+ \\ 34 \\ \hline \end{array}$$

(I)

$$\begin{array}{r} 89- \\ 15 \\ \hline \end{array}$$

(L)

$$\begin{array}{r} 82+ \\ \quad 7 \\ \hline \end{array}$$

(N)

$$\begin{array}{r} 46- \\ 26 \\ \hline \end{array}$$

(P)

$$\begin{array}{r} 15+ \\ 12 \\ \hline \end{array}$$

(S)

$$\begin{array}{r} 93- \\ 42 \\ \hline \end{array}$$

(T)

$$\begin{array}{r} 76- \\ 34 \\ \hline \end{array}$$

(U)

$$\begin{array}{r} 27+ \\ 61 \\ \hline \end{array}$$

- Escribe el mensaje secreto.

				A
54	88	74	66	38

89	38	51

27	89	38	20	42	38	51